



Determine the amount of money shown.

Answers



1. \_\_\_\_\_




2. \_\_\_\_\_



3. \_\_\_\_\_

4. \_\_\_\_\_



5. \_\_\_\_\_

6. \_\_\_\_\_




7. \_\_\_\_\_

8. \_\_\_\_\_





9. \_\_\_\_\_

10. \_\_\_\_\_





Determine the amount of money shown.



Answers

1. \$0.81

2. \$0.86

3. \$0.98

4. \$0.97

5. \$0.73

6. \$0.84

7. \$0.98

8. \$0.80

9. \$0.77

10. \$0.94